

Examination Paper

Music Theory Grade 1

Time Allowed: 1 hour 30 minutes

Answer all questions on this paper



Student's Name

Total Marks out of 100

1 Write the letter names and time names under each of these notes. The first one is done for you.



| | | | | | | |
|--------------------|------------------|-------|-------|-------|-------|-------|
| Letter name | <u>D sharp</u> | _____ | _____ | _____ | _____ | _____ |
| Time name | <u>Semibreve</u> | _____ | _____ | _____ | _____ | _____ |

10 Marks

2 Name these notes then draw the same note with a different name beside each other. Also write the name under the new notes. The first one is done for you.



| | | | | | |
|-----------------------|-------|-------|-------|-------|-------|
| <u>A sharp B flat</u> | _____ | _____ | _____ | _____ | _____ |
|-----------------------|-------|-------|-------|-------|-------|

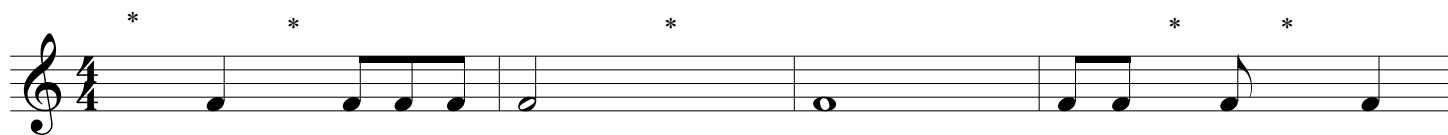
10 Marks

3 Add the missing barlines to each of these melodies:



10 Marks

4a Add one note at every * to complete each bar:




4b Add one rest at every * to complete each bar:




10 Marks


5a Write the solfa names under the scale of G Major



5b Add a clef and key signature to make this the scale of F major



5c Write the scale of D major going up and down in the treble clef. Use a key signature.



10 Marks


6a In this scale of G major mark the semitones with a slur.



6b Draw the missing sharp and flat signs in front of the notes that need them. Then write T for tone and S for semitone above each pair of notes.




B flat A E F sharp F sharp G C sharp D



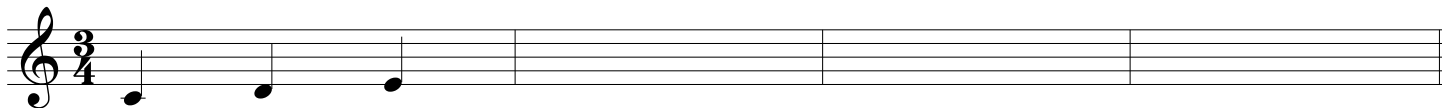
B flat C D E flat A B F G flat

10 Marks

7 This tune is in C major. Finish writing the notes below on the treble clef. (The first bar is already done.)



d r m s m f m r d



10 Marks



Study this melody and answer the following questions

Allegro

1 *p* *mp*

5 *pp* *p*

8 Give the meaning of these signs and expressions that are used in the piece above.

- (i) **Allegro** _____
- (ii) ***pp*** _____
- (iii) ***mp*** _____
- (iv)  _____
- (v)  _____

10 Marks

9 Answer the following questions:

- (i) Which key is the music in? _____
- (ii) Give the name of the clef _____ What is its other name? _____
- (iii) Which three bars do not contain any quavers? _____
- (iv) How many quavers are used in this piece? _____
- (v) What is the highest note in the piece? _____ In which bar is it heard? _____

10 Marks

10 Follow the instructions below carefully.

- (i) Copy out the first line of the tune, with the time signature and key signature.

- (ii) Add a crescendo to bar 2 of the music which you copied out.
- (iii) Add a symbol below bar 4 in order for the music to be played quietly.

10 Marks