

Examination Paper

Music Theory Grade 1

Time Allowed: 1 hour 30 minutes

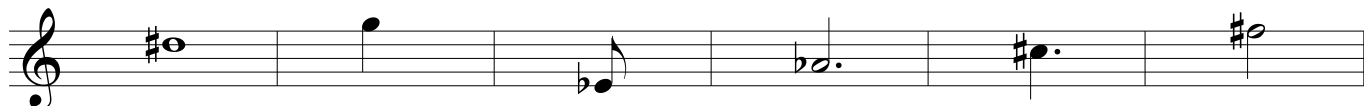
Answer all questions on this paper



Student's Name

Total Marks out of 100

1 Write the letter names and time names under each of these notes. The first one is done for you.



Letter name	<u>D sharp</u>	_____	_____	_____	_____	_____
Time name	<u>Semibreve</u>	_____	_____	_____	_____	_____

10 Marks


2 Name these notes then draw the same note with a different name beside each other. Also write the name under the new notes. The first one is done for you.



<u>A sharp B flat</u>	_____	_____	_____	_____	_____
-----------------------	-------	-------	-------	-------	-------

10 Marks

5c Write the scale of G major going up and down in the bass clef. Use a key signature.



10 Marks

6a In this scale of F major mark the semitones with a slur.



6b Draw the missing sharp and flat signs in front of the notes that need them. Then write T for tone and S for semitone above each pair of notes.




G F sharp C sharp D A Flat G E F Sharp



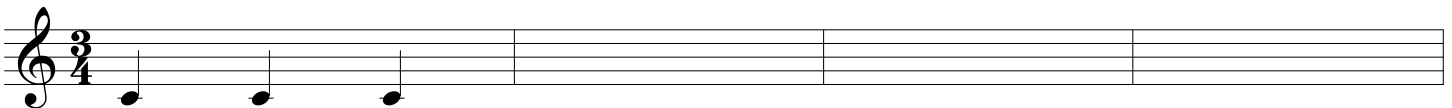
D sharp C sharp E flat D G A D Sharp E

10 Marks

7 This tune is in C major. Finish writing the notes below on the treble clef. (The first bar is already done.)



d d d r m f m r d



10 Marks


Moderato

1

mp

5

8 Give the meaning of these signs and expressions that are used in the piece above.

- (i) **Moderato** _____
- (ii) *mp* _____
- (iii) The dots above the notes in bar 1 _____
- (iv) The lines above or below some notes in the piece. _____
- (v)  _____

10 Marks

9 Answer the following questions:

- (i) Which key is the music in? _____
- (ii) Give the name of the clef _____ What is its other name? _____
- (iii) Which two bars do not contain any quavers? _____
- (iv) How many quavers are used in this piece? _____
- (v) What is the highest note in the piece? _____ How many times is it played? _____

10 Marks

10 Follow the instructions below carefully.

- (i) Copy out the first line of the tune, with the time signature.

- (ii) Add a diminuendo in bar 2 of the music which you copied out.
- (iii) Add a crescendo in bar 3 of the music which you copied out.

10 Marks